


# Identifying Newton's Laws

For each illustration, describe how the given laws affect the object's motion.



Earth

1

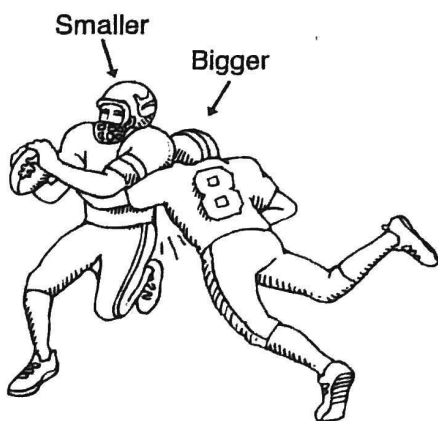
First Law of Motion: \_\_\_\_\_

\_\_\_\_\_

2

Third Law of Motion: \_\_\_\_\_

\_\_\_\_\_



3


Second Law of Motion: \_\_\_\_\_

\_\_\_\_\_

4

Third Law of Motion: \_\_\_\_\_

\_\_\_\_\_



5

First Law of Motion: \_\_\_\_\_

\_\_\_\_\_

6

Third Law of Motion: \_\_\_\_\_

\_\_\_\_\_